




UNDERSTAND



PLAN



<p>Multiplicative Models</p> 	<p>Drawing Pictures and/or Diagrams</p> 
<p>Two-Word Problems</p> 	
<p>Number Sentences/Equations</p> $7 + 1 = 8$	<p>One + Multiple Operations</p> <p>I added the numbers...</p>

SOLVE



REFLECT

